

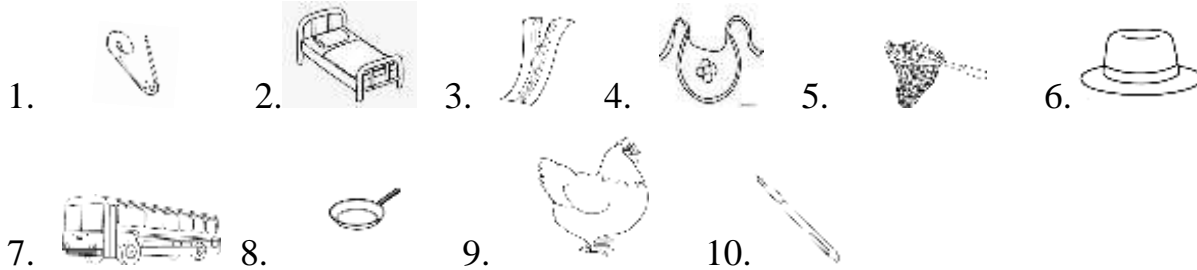
CLASS: I

ASSIGNMENT (WORKSHEET)

SUB: ENGLISH

I. Write cursive small letters a-z (2times)

II. Name the given pictures:



III. Write the missing letters:

1. n _ b 2. d _ n 3. c _ n 4. s _ n 5. d _ t 6. w _ g 7. l _ g
8. p _ n 9. n _ t 10. m _ n 11. d _ g 12. g _ n 13. p _ g 14. r _ d
15. m _ p 16. t _ n 17. b _ t 18. z _ p 19. b _ d 20. c _ p

IV. Write any 3 blend words for each one:

1. 'an' 2. 'et' 3. 'ug' 4. 'ot'

V. Write any one rhyming word for each:

1. men 2. nib 3. fox 4. sat 5. gun

VI. Draw the pictures for the given words:

1. lid 2. tap 3. pot 4. bug 5. rat 6. den 7. lip 8. nut

-0-

CLASS : 1 SUB : E.V.S (WORK SHEET)

1. What is your name?

2. I am a _____ (girl/ boy).

3. I study in class _____.


4. Collect any five pictures of red colour fruits and paste them.

5. Paste any four pictures of Living things and Non living things.

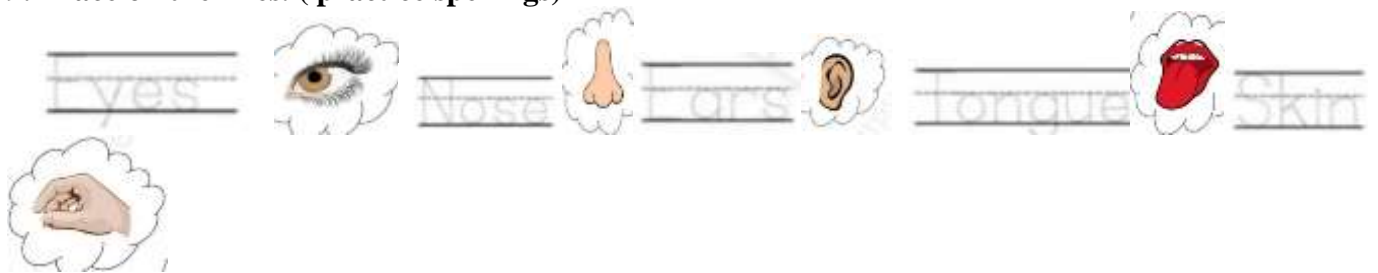
6. Vegetables are good for health. Collect some pictures and paste.

7. Collect pictures of any three things which float on water.

8. Identify the given fruits write beginning letter.



9. Trace on the lines. (practice spellings)



10. Paste any three food pictures which we cook and eat.

कक्षा - 1

विषय -हिंदी (2L)

1. स्वरो को लिखिए -

2. नीचे दिए गए चित्रों का पहला अक्षर लिखिए -



3. नीचे दिए गए वर्णों को पूरा कीजिए -

1. च 2. क 3. ट 4. प 5.

4. नीचे दिए वर्णों में मात्राओं को लिखिए -

1. उ - = क ग च ज ट ख ठ घ
2. ऊ - = क ग च ज ट ख ठ घ
3. इ - = क ग च ज ट ख ठ घ
4. ई - = क ग च ज ट ख ठ घ
5. ए - = क ग च ज ट ख ठ घ
6. ऐ - = क ग च ज ट ख ठ घ
7. आ - = क ग च ज ट ख ठ घ

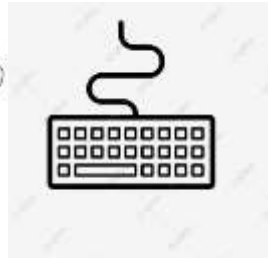
Class : I

Teacher : Manohara

Subject: Telugu 2L

S No.	Writing	Reading	Activity
1	"అ" నుండి "ఆ" వరకు రాయండి	"అ" నుండి "ఆ" వరకు చదవండి	-
2	"క" నుండి "మ" వరకు రాయండి	"క" నుండి "మ" వరకు చదవండి	"అ" నుండి "ఆ" వరకు chart తయారు చేయండి
3	గుణింతపుగుర్తులు (అ నుండి ఆ వరకు) రాయండి.	గుణింతపుగుర్తులు (అ నుండి ఆ వరకు) చదవండి.	-
4	"క" నుండి "ట" వరకు గుణింతాలు రాయండి	"క" నుండి "ట" వరకు గుణింతాలు చదవండి	-
5	1 నుండి 10 అంకెలు రాయండి	1 నుండి 10 అంకెలు చదవండి	1 నుండి 10 అంకెలు chart తయారు చేయండి
6	"క" నుండి "క్ష" వరకు ఒత్తులు రాయండి	"క" నుండి "క్ష" వరకు ఒత్తులు చదవండి	-

CLASS –1 - IT



*Draw above computer parts neatly in A4 paper and name the parts.

I. Write numerals from 1 – 100.

II. Insert missing numbers.

- (a) 89 ____ 92 ____ (b) ____ 10 ____ 12 ____ 14
(c) ____ 48 ____ 51 ____ (d) 66 67 ____ 69 ____

III. Write before, after and between number

- (a) ____ 40 (a) 78 ____ 80 (a) 50 ____
(b) ____ 36 (b) 63 ____ 65 (b) 25 ____
(c) ____ 50 (c) 29 ____ 31 (c) 11 ____

IV. Write missing letters of comparisons.

- (1) b ____ g (2) l ____ n ____ 3. t ____ l ____ 4. m ____ r ____ 5. l e ____ 6. s m ____ l ____

V. Write number names for the given numbers:

- a. 8 = _____ d. 15 = _____ g. 10 = _____
b. 11 = _____ e. 20 = _____ h. 16 = _____
c. 4 = _____ f. 12 = _____ i. 7 = _____

VI. Add the given numbers:

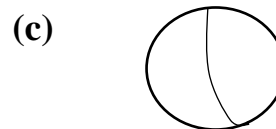
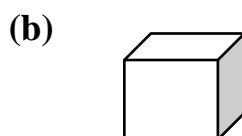
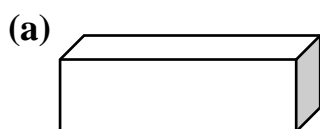
- | | | | | | | | |
|-------|-------|-------|-------|-------|-------|-------|-------|
| a. 6 | b. 5 | c. 7 | d. 2 | e. 9 | f. 4 | g. 6 | h. 8 |
| + 4 | + 3 | + 0 | + 6 | + 1 | + 4 | + 3 | + 0 |
| _____ | _____ | _____ | _____ | _____ | _____ | _____ | _____ |
| _____ | _____ | _____ | _____ | _____ | _____ | _____ | _____ |

VII. Draw four flat shapes, colour and name them.

VIII. Subtract the given numbers.

- | | | | | | | | |
|-------|-------|-------|-------|-------|-------|-------|-------|
| a. 6 | b. 5 | c. 7 | d. 9 | e. 8 | f. 5 | g. 4 | h. 2 |
| - 5 | - 3 | - 0 | - 8 | - 5 | - 5 | - 3 | - 0 |
| _____ | _____ | _____ | _____ | _____ | _____ | _____ | _____ |
| _____ | _____ | _____ | _____ | _____ | _____ | _____ | _____ |

IX. Identify and write the name of the given solid shapes.



DAV BDL PUBLIC SCHOOL, BHANOOR
HOLIDAY HOMEWORK

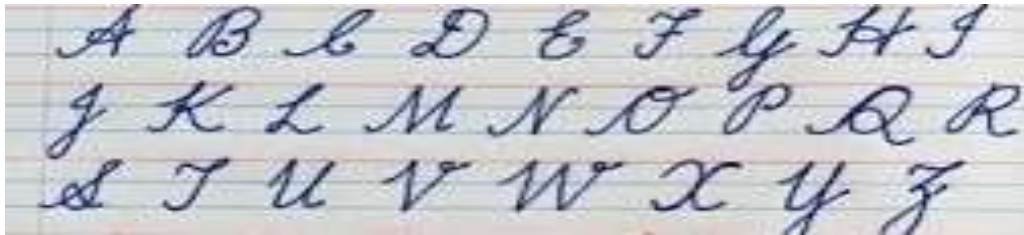
CLASS: II SUB: ENGLISH

I. Write Cursive letters.... Small case letters:




write 5 letters each day.... full page.

II. Write Cursive letters.....Capital letters:



Write 5 letters each day,,,, full page.

III. Write Cursive letters..... Capital and Small case together.



Write 5 letters each day..... full page.

IV. Write five words for each “a”, “u” and “i” sound words(word train).

V. Give the plurals of : (One and Many)

a. fairy b. box c. story d. car

VI. Unscramble the jumbled sentences.

- | | |
|--------------------------------|---------------------------------|
| 1. Cuckoo / A/ sings/ sweetly. | 3. Sunny / hot / Its / a / day. |
| 2. doll / girl / The / a/ has. | 4. Thirsty / Crow / The. |

VII. Draw a balloon and write five sentences about it.

VIII. Draw and colour the pictures you find at birthday party.

IX. Fill in the blanks with **has / have**.

1. I _____ a yellow flower. 2. She _____ a red balloon.

X. Fill in the blanks with **a / an**.

1. _____ elephant 2. _____ toy 3. _____ igloo 4. _____ car.
-

I. GIVE ONE WORD FOR EACH OF THE FOLLOWING:-

1. Name the brand of the toothpaste that you use.
2. How many times should we brush our teeth ?
3. What do we use when we have a runny nose?
4. Name the meal that we eat in the morning.
5. Write an example of food that we make out of pulses.

II UNSCRAMBLE THE WORDS :-

1. AMPOOSH -----
2. OOTHT PATES -----
3. HIRA LIO -----
4. CUERTT NIAL -----
5. OWTEL -----

III FILL IN THE BLANKS :-

1. Animals give us ----- and -----.
2. We get all milk products from -----
3. We can make soup out of -----
4. -----juices are good for health.
5. A house keeps us -----

IV CRACK THE RIDDLES :- (GUESS WHO AM I?)

1. I am made of snow, I am cold to touch !!!!!!!!!!!!! -----
2. I am used in picnics , people make me with a canvas or a thick cloth-----
3. I am so high , I feel as if I am touching the sky.-----
4. I always float on the water. You can live in it too!!!! -----
5. I move on my wheels with a house on my head .-----

V PICK THE ODD ONE OUT :-

1. House ; windows; doors; grass
2. Ice cream; butter ; bread; ghee
3. Herbs; huts; shrubs; creepers
4. Pucca house; kachcha house; living room; bungalow
5. Carrot; potato; tomato; beetroot

VI TICK THE RIGHT ANSWER:-

1. Which fruit do we find everywhere in the summer?(Mango/ Jackfruit)
2. Mention the name of the big fruit that is watery in taste.(Pumpkin / Watermelon)
3. Name the plant that takes support to climb.(Money plant/ Cotton plant)
4. Write the name of the root that is conical in shape. (Brinjal/ Carrot)
5. The bunch of spinach is called. (Stem/Leaves)
6. The tasty round chappatis are made from (Rice /Wheat)
7. Eggs, milk and meat are products of (Plants/ Animals)
8. Which part of the plant goes into the soil? (Stem/ Root)
9. How many years does a tree live ? (Many years / Many months)
10. The flowers of plant change into -(Fruits/ Buds)

-0-

कक्षा - 2 विषय - हिंदी (2L)

1. स्वर लिखिए

2. नीचे दिए गए वर्णों को पूरा कीजिए -

1. च

क

ट

प

त

3. नीचे दिए शब्दों में आए मात्राओं का चिह्न लिखिए -

केला सपने



सूरज फूल



मकड़ी वीर



रेलगाड़ी पेड़

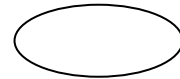
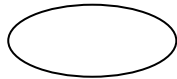
दूध कबूतर

नीली मछली

सिर टिकट

नोट मोर

माता भगवान



दिन कवि

गोल कोट

हलवा भरना

4. नीचे दिए वर्णों में मात्राओं को लिखिए -

1. उ - = क ग च ज ट ख ठ घ

2. ऊ - = क ग च ज ट ख ठ घ

3. इ - = क ग च ज ट ख ठ घ

4. ई - = क ग च ज ट ख ठ घ

5. ए - = क ग च ज ट ख ठ घ

6. ऐ - = क ग च ज ट ख ठ घ

7. आ - = क ग च ज ट ख ठ घ

Class :II

Teacher : Manohara

Subject: Telugu 2L

S No.	Writing	Reading	Activity
1	"అ" నుండి "అః" వరకు రాయండి	"అ" నుండి "అః" వరకు చదవండి	-
2	"క" నుండి "మ" వరకు రాయండి	"క" నుండి "మ" వరకు చదవండి	"క" నుండి "క్ష" వరకు chart తయారు చేయండి
3	గుణింతపుగుర్తులు (అ నుండి అః వరకు) రాయండి.	గుణింతపుగుర్తులు (అ నుండి అః వరకు) చదవండి.	-
4	"క" నుండి "ట" వరకు గుణింతాలు రాయండి	"క" నుండి "ట" వరకు గుణింతాలు చదవండి	-
5	1 నుండి 20 అంకెలు రాయండి	1 నుండి 20 అంకెలు చదవండి	1 నుండి 20 అంకెలు chart తయారు చేయండి
6	"క" నుండి "క్ష" వరకు ఒత్తులు రాయండి	"క" నుండి "క్ష" వరకు ఒత్తులు చదవండి	-
7	రెండుఅక్షర పదాలు ఏవైన పది రాయండి	రెండుఅక్షర పదాలు ఏవైన పది చదవండి	-

CLASS – II - IT

*Type few sentences about your favourite colour in notepad and forward it to

mulaharipriya@gmail.com

NOTE - Above work can be done in desktop, laptop or mobile phones

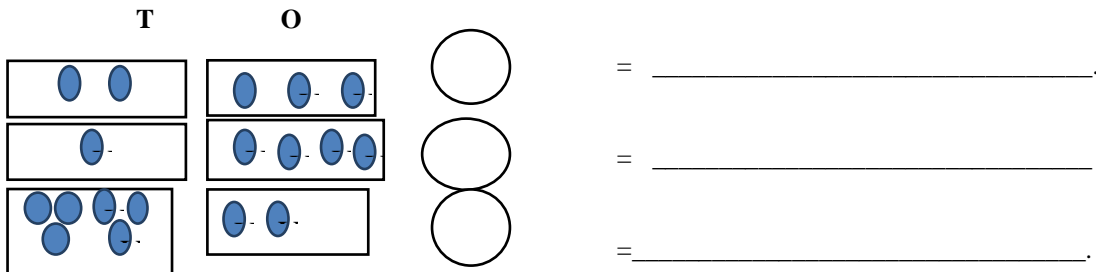
Class: II

HOLIDAYS ASSIGNMENT

SUB: MATHS

Solve the following questions.

1. What number does the figure show? Write the figure and write number name.



2. Arrange the numbers as directed.

ASCENDING ORDER	DESCENDING ORDER
a) 29, 79, 16, 45, 80	a) 40, 86, 49, 87, 67
b) 99, 36, 96, 63, 88	b) 76, 70, 94, 81, 66

3. Compare the following numbers by selecting < or > or =

a) $40 + 5$ $10 + 40$ b) $12 +$ $20 - 1$ c) 10 $12 + 0$ d) $9 + 5$

4. Write the numbers from 192 to 221

4) Find the answers from the grid for the given questions.

8 + 10	65 - 14	16 - 13	14 + 12	40 - 30	47 + 12	9 + 11
--------	---------	---------	---------	---------	---------	--------

5	3	11	8	12	21	31
12	61	0	5	99	26	62
4	88	49	78	10	70	14
40	1	20	66	30	59	18
19	15	2	95	40	80	22
51	6	100	18	50	10	44
33	27	88	81	60	90	55

5) Fill in the blanks.

a) $4 \times \underline{\quad} = 8$ b) $\underline{\quad} \times \underline{\quad} = 10$ c) $\underline{\quad} \times 3 = 27$ d) $5 \times 9 = \underline{\quad}$ e) $2 \times 8 = \underline{\quad}$ f) $10 \times \underline{\quad} = 0$

6) Write the number that comes **before, after and between.**

a) $\underline{\quad}$, 17 b) 49, $\underline{\quad}$ c) 89, $\underline{\quad}$, 91 d) $\underline{\quad}$, 93 e) 56, $\underline{\quad}$ f) 106, $\underline{\quad}$, 108 g) $\underline{\quad}$, 100

7) OCCASION DATE DAY MONTH

1. MY BIRTHDAY : _____

2. MY MOTHERS BIRTHDAY : _____

3. MY FATHERS BIRTHDAY : _____

4. MY BROTHER/SISTER : _____

**DAV BDL PUBLIC SCHOOL, BHANOOR
HOLIDAYS HOMEWORK -2022-23**

CLASS: III

SUB: ENGLISH

I. Prepare an animal/ bird mask and write 4 to 5 sentences about it.

II. Look at the picture carefully and write 5 to 6 sentences about it:



III. Write a / an before each noun:

1. _____ igloo 2. _____ banana 3. _____ inch 4. _____ bench

IV. Make 10 words with the given word (Word building): “International”

V. Fill in the blanks with “ He, She and It”

1. My father goes to the office. _____ goes by car.
2. Rohan is a good boy. _____ works hard.
3. Cow is a pet animal. _____ gives us milk.
4. I sit on a chair. _____ is made of wood.

VI. Read the words and write them in the appropriate columns:



Doctor



Singer



Beach



Table



Ball



Monkey



Cat



Airport



Books



Farm



Horse



Teacher

Person

Things

Places

Animals

कक्षा - 3

विषय -हिन्दी -2L

1)वर्ग पहेली में से स्वर और व्यंजनों को उचित क्रम में लिखिए -

अ	ए	आ	ऐ	उ	ऊ	इ
ई	ऋ	ओ	औ	अं	अः	ग
च	ज	X	ड	X	घ	ख
च	झ	ञ	ट	ड	ठ	ग
ण	ढ	थ	ध	X	X	त
छ	क	द	न	ब	प	फ
भ	X	म	र	य	ल	श
व	ष	ह	स	क्ष	ज्ञ	त्र

2) निम्नलिखित स्वरों के मात्राएँ लिखिए -

आ इ ई उ ऊ ऋ ए ऐ ओ औ

3) निम्नलिखित अक्षरों के बारहखड़ी लिखिए -

i) क ii) ग iii) च iv) न v) म

4) निम्नलिखित शब्दों से वाक्य बनाइए -

i) कमल ii) कक्षा iii) लोमड़ी iv) पेड़ v) दवाई

5) पेड़ का चित्र बनाकर रंग भरिए-

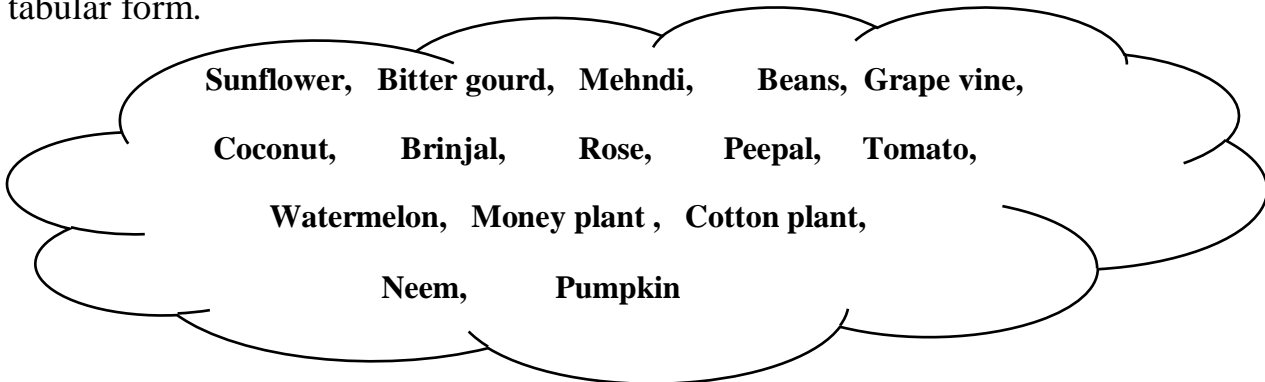
CLASS: III

ASSIGNMENT

SUB: SCIENCE

1. Write only ten body parts (other than sense organs).

2. Draw mind map of sense organs.
3. Write any three uses of eyes, nose and skin.
4. Write any six breakfast items. Out of those classify healthy and unhealthy breakfast items.
5. Write the things that we get from the given animals:
 - a. Elephant b. Silkworm c. Sheep d. Crocodile
6. Identify the following and put them in Trees, Herbs, Shrubs, Climbers, and Creepers as a tabular form.



7. Name, Draw and Colour any five sources of water.

CLASS- III SOCIAL SCIENCE

Instructions: 1. The assignment must be neatly written without any errors in the spellings.

1. Identify the given occupations and write two sentences on each.



2. Name the given food crops / grains.





3. Identify the seasons and name the fabrics (dress) worn in these seasons.



4. Name the type of shelters and where are they commonly found?



5. Answer the following questions in a sentence.

- Write the names of your paternal and maternal grandparents.
- Which is your favourite food? Is it a healthy or a junk food?
- How do you help your parents at home?
- Which game do you like to play? Is it an outdoor or an indoor game?

e) CLASS:III

SUB:TELUGU(2nd Lang)

Sl no	TOPIC	ACTIVITY/HOME WORK
1	అచ్చులు.	అక్షరములను వరుసక్రమంలో వ్రాయండి. చదవండి.
2	హల్లులు ('క' నుండి 'మ')	'క' నుండి 'మ' వరకు అక్షరములను రాయండి.
3	హల్లులు ('య' నుండి 'ఱ')	వర్ణమాల చార్ట్ ను తయారు చేయండి. వర్ణమాలను రాయండి.
4	గుణింతపు గుర్తులు	గుణింతపు గుర్తులు రాయండి. నీతి కథలను వింటూ అక్షరములను గుర్తించండి. వినండి.
5	గుణింతాలు	మీకు తెలిసిన ఏమైనా ఐదు గుణింతములను రాయండి

	(‘క’ నుండి ‘ఱ’ వరకు)	వార్తా పత్రిక నందు అక్షరములను గుర్తించండి.
6	2 అక్షర పదాలు ,3 అక్షర పదాలు 4అక్షర పదాలు	మీ సొంత మాటల్లో నాలుగు అక్షర పదాలు 10 వ్రాయండి. చందమామ పుస్తకమును చదువుటకు ప్రయత్నం చేయండి.

CLASS – III - IT

*Stick a picture of keyboard in A4 paper and mention the functions of following keys
(BACKSPACE, ENTER, SHIFT, SPACEBAR, CAPSLOCK,TAB, ESCAPE).

CLASS: III

HOLIDAY’S ASSIGNMENT

SUBJECT: MATHS

1. Write the number name	2. Write the numeral
652	Nine hundred fifty two
149	One hundred twenty six
295	Six hundred eighty
308	Five hundred two

3. Complete the sums.

$150 + 9 =$	$100 + \quad = 154$	$149 - 9 =$	$154 - \quad = 150$
$150 + 4 =$	$100 + \quad = 143$	$164 - 4 =$	$199 - \quad = 100$
$150 + 0 =$	$100 + \quad = 105$	$206 - 6 =$	$116 - \quad = 16$

4. Write the following numbers from biggest to smallest.

125	135	205	185	115	215	145	165

5. Fill up the blanks.

$500 + 80 + 3 =$	$\quad + \quad + \quad = 195$	$8 + 40 + 600 =$	$\quad + \quad + \quad = 287$
------------------	-------------------------------	------------------	-------------------------------

6. Write the number that comes before, after and between.

- a) _____ 501 b) 699 _____ c) 609 _____ d) 119 _____ 121 e) 168 _____ 170
f) 758 _____ g) 462 _____ h) _____ 200 i) 134 _____ 135 j) 529 _____ 531

7. Complete: More/Less than.

5 more than 346 =	10 less than 349 =	10 more than 565 =
4 less than 502 =	6 more than 569 =	7 less than 462 =

8. Complete the table:

Double the numbers			Half the numbers		
6 → 12	30 →	12 →	10 → 5	8 →	50 →

9. Circle what is the value of ?. $136 - ? = 92$.

48	44	
----	----	--

10. Fill in the blanks with correct answer.

$5 \times 9 = \underline{\hspace{2cm}}$

$6 \times 4 = \underline{\hspace{2cm}}$

$7 \times 5 = \underline{\hspace{2cm}}$

$4 \times 8 = \underline{\hspace{2cm}}$

$8 \times 6 = \underline{\hspace{2cm}}$

11. Write the missing numbers.

$4 + 3 + 2 = 7 + \underline{\hspace{1cm}} = \underline{\hspace{2cm}}$	$5 + 2 + 2 = \underline{\hspace{1cm}} + 4 = \underline{\hspace{2cm}}$
$3 + 6 + 5 = 9 + \underline{\hspace{1cm}} = \underline{\hspace{2cm}}$	$5 + 8 + 3 = \underline{\hspace{1cm}} + 8 = \underline{\hspace{2cm}}$

12. Use appropriate sign $>$, $<$ or $=$

$2 \times 5 \underline{\hspace{1cm}} 4 \times 3$	$9 \times 2 \underline{\hspace{1cm}} 5 \times 6$	$3 \times 5 \underline{\hspace{1cm}} 2 \times 3$	$4 \times 4 \underline{\hspace{1cm}} 3 \times 3$
--	--	--	--

13. Find the product and then arrange in increasing order.

$5 \times 8 =$

$4 \times 2 =$

$3 \times 8 =$

$5 \times 11 =$

$4 \times 8 =$

..... < < < <

14. Look at the number patterns. Write the missing numbers.

a)

20

40

--

--

100

--

--

b)

16

20

--

--

32

--

--

15. Fill in the missing sign: (+, -, x)

a) $3 \underline{\hspace{1cm}} 9 = 12$ b) $4 \underline{\hspace{1cm}} 6 = 24$ c) $120 \underline{\hspace{1cm}} 5 = 125$ d) $23 \underline{\hspace{1cm}} 7 = 16$ e) $200 \underline{\hspace{1cm}} 40 = 240$

f) $12 \underline{\hspace{1cm}} 6 = 72$ g) $68 \underline{\hspace{1cm}} 1 = 69$ h) $45 \underline{\hspace{1cm}} 7 = 38$ i) $63 \underline{\hspace{1cm}} 1 = 63$

16. Answer the following:

a) How many FIVES make 30?

b) Renu has 9 chocolates which she shares between her 3 friends. How many do they each get?

c) How many socks are in 6 pairs?

d) What is the next number? 89, 87, 85, 83, 81, _____.

e) How much more is 18 than 13?

CLASS : 4

SUB : ENGLISH

1. Add an Adjective (Describing Word) to the given Noun :

i) A _____ flower ii) A _____ book iii) A _____ friend

iv) A _____ school v) A _____ man vi) A _____ girl

2. Pick out the Noun from the sentence and put them in the correct column:

	Sentence	Proper Noun	Common Noun
i)	Jane Taylor was a poet.		
ii)	Snoopy is my pet dog.		
iii)	Dr. Abdul Kalam was a scientist.		
iv)	My mother is Mrs. Divya.		
v)	India is my country.		
vi)	D.A.V Public school is a famous school.		

3. Rearrange the words to form meaningful sentences:

i) jungle / animals / happily / the / lived / in / the

ii) place / Kashmir / a / is / beautiful

iii) shopkeeper / Ravi's / a / father / is / town / in / the

iv) class / Rohini / the / topper / is / of / the

4. Circle the verb (Action word) in the following sentences :

i) The train arrived in time . iii) The principal punished the class boys.

ii) My mother bakes cookies . iv) The baby was sleeping on the mat.

5. Give the opposite to the following words :

i) friend X _____ ii) find X _____ iii) few X _____ iv) foolish X _____ v) full X _____

6. Look at the picture carefully and write 5 to 6 lines about it .



1. Write the missing blanks in the given table:

S No.	ITEM	SENSE ORGAN	FEEL
1.	Salt		
2.	Perfume		
3.	Surface of a table		Smooth
4	Melodious music		
5.	Red rose		Red

2. Read the passage and answer the following questions.

Water is the basic need of every life form on Earth. It is Water that helps us to lead a comfortable life on this planet. Our bodies are made up of 70% water. We use Water for so many purposes. We need water for drinking, cooking, bathing, and cleaning. Without Water, life would be impossible on the planet.

- Name two main natural sources of water.
- Which is the longest river in the world?
- What do you mean by hydro electricity
- Write any two ways to save the water.
- How many glasses of water you drink in a day?

3. Make a leaf album with leaves having different margins. (Minimum six types of leaves)

4. Prepare a sandwich with the help of your parents and answer the below questions.

- What are the ingredients used to make a sandwich?
- How is the taste? Write briefly.
- What are the nutrients present in your ingredients?
- How much time did it take approximately to prepare your sandwich?
- How is your experience after making a sandwich?

5. Grow microgreens like fenugreek, coriander etc in your kitchen garden / trays. Note down the day-to-day observations. (Take the pictures at different stages and save it in your device)

6. Explain few summer drink recipes which can be made by lemon, water-melon and mango.

7. Label the parts of the given plant and write their functions.



Instructions: 1. The assignment must be neatly written without any errors in the spellings.

2. Map work must be neat and legible.

- I. (a). Define the following: (a) Island (b) Mountain (c) Plain (d) Plateau
- (b) Which are the two group of Islands that are a part of India?
- (c) Name are the main seasons of India.
- (d) List any four rivers of India.
- (e) Mention all the neighbouring states of Telangana.

II.Fill in the blanks:

1. India is located in the southern part of the continent of _____
2. India is the _____ largest country in the world in area and the second largest in _____
3. The southern most tip of India is _____
4. The smallest state in India is _____
5. India is surrounded by water bodies namely _____ in the west, _____ in the east, and _____ in the south.
6. India is a Union of _____ states and _____ Union Territories.
7. Chandigarh is the capital of two states namely _____ and _____

III.Raju went with his friend to a village.He observed that there were many houses made of bamboo,dried leaves , mud and one very large house made of bricks,marble,stone and cement.

- (a) What kind of houses are made of bamboo,dried leaves and mud ?
- (b) What kind of house was the big one he saw?

III.On India Political Map locate, labeland colour the states that begin with letter 'A' , 'T' , 'M' 'K' and 'U'

Class :IV

Teacher : Manohara

Subject: Telugu 2L

S No.	Writing	Reading	Activity
1	అనుండి అ: వరకు రాయండి	అనుండి అ: వరకు చదవండి	-
2	కనుండి మ వరకు రాయండి	కనుండి మ వరకు చదవండి	కనుండి క్ష వరకు chart తయారు చేయండి
3	గుణింతపుగుర్తులు (అ నుండి అ: వరకు) రాయండి.	గుణింతపుగుర్తులు (అ నుండి అ: వరకు) చదవండి.	-
4	కనుండి మవరకు గుణింతాలు రాయండి	కనుండి మ వరకు గుణింతాలు చదవండి	-
5	1 నుండి 30 అంకెలు రాయండి	1 నుండి 30 అంకెలు చదవండి	1 నుండి 30 అంకెలు chart తయారు చేయండి
6	కనుండి క్ష వరకు ఒత్తులు రాయండి	కనుండి క్ష వరకు ఒత్తులు చదవండి	-
7	రెండుమూడు నాలుగు అక్షర పదాలు ఏవైన పది రాయండి	రెండుమూడు నాలుగు అక్షర పదాలు ఏవైన పది చదవండి	రెండుమూడు నాలుగు అక్షర పదాలు

			chart ను తయారు చేయండి.
8	వారానికి ఎన్ని రోజులు అవి ఏవి?	-	వారానికి ఎన్ని రోజులు chart ను తయారు చేయండి.
9	తెలుగునెలల పేర్లు రాయండి	తెలుగునెలల పేర్లు రాయండి	తెలుగునెలల chart ను తయారు చేయండి.

CLASS – IV - IT



*Write a logo command for the following figures neatly in a A4 paper

कक्षा-चौथी (4)

विषय- हिंदी (2L)

I) स्वरों से खाली स्थान को पूरा कीजिए-

अ ___ इ ___ उ ___ ए ___ औ ___ अः

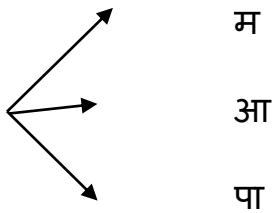
II) बारहखडी लिखिए -म,स,घ,ज, त

III) आ की मात्रा लगाकर शब्द पूरा कीजिए-

1) म ल 2) न ल 3) अ ज 4) ब ल 5) ब द ल

6) म क न 7) ग ज र 8) ट म ट र 9) र ज 10) र म

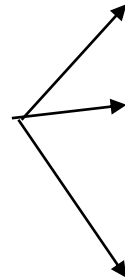
IV) निम्नलिखित वर्ण जोड़कर नया शब्द पूरा लिखिए -



म

आ

पा



ल क

समान

ठशाला

राम

लना

v) निम्नलिखित शब्दों से वाक्य बनाइए -

1) गीता 2) घर 3) दोस्त 4) आम 5) पेड़

-0-

अवकाश कालीन गृहकार्य -2022 -23

कक्षा- चौथी (4)

विषय- हिंदी (3L)

I) Write Missing Letter-

अ ___ इ ___ उ ___ ए ___ औ ___ अः

II). Write After Letter -

1) क --- 2) द --- 3) म --- 4) ओ --- 5) ल ----
6) ठ --- 7) इ --- 8) ए -- 9) ब -- 10) ज ---

III). Circle the similar letter -

1) त - स ब त 2) श - श क ज 3) ग - य ग ह
4) छ - व छ फ 5) ढ - क्ष ड ढ

IV) Search and write two letter and three letter words-

कमल घर बस महल जग
फल सड़क नगर नल अमर

-0-

CLASS-IV, MATHS

Solve the following questions.

1. Write the given number in words.

a) 2914 b) 3069 c) 9870 d) The greatest 4-digit number

2. Which is greater? The largest 3-digit number or the successor of the greatest 2-digit number?

3. Write the numeral form of

a) Six thousand four hundred five. b) Three thousand nine hundred sixty-seven.

4. Write the place and place value of the underlined digits.

a) 6457 b) 2098 c) 8965 d) 3465

5. Write the Predecessor and the Successor of the following.

Predecessor	Number	Successor
	8900	
	Six thousand forty three	
	Greatest 3-digit number	
	298 + 456	

6. Find the number which is a) 300 more than 6790 b) 400 less than 7096

7. Find the sum of Six thousand four hundred sixteen and Two thousand nine hundred twenty nine.

8. What number to be added to 3689 to get the sum 6798?

9. Find the product of the greatest 3-digit number and the greatest 2-digit number.

10. Convert the following

a) January + March + May into days b) September + 2 weeks into days c) 2 hours 45 minutes into minutes d) 42 days into hours e) 5kg + 6kg + 9kg into grams

11. Rakhi travelled a distance of 45 km by bus. Find the distance she travelled in metres.

12. In 3 days Raju's cow gave 7L, 8 L and 6 L milk. Find the quantity of milk in millilitres Raju's cow gives in 3 days.

13. Solve and find the answers from the grid and encircle it.

a) $234 + 40 + 1345$ b) $4976 \div 8$ c) 156×37 d) $7098 - 0$ e) $7536 - 3178$ f) $625 \div 5$

2	4	0	3	5	8	5
5	4	6	5	7	7	7
4	3	5	1	7	3	8
3	5	4	6	2	2	9
9	8	2	1	9	1	1
6	3	1	9	9	3	2
1	7	0	9	8	4	5

a) _____ b) _____
c) _____ d) _____
e) _____ f) _____

CLASSES : IV - B & C SUBJECT : TELUGU - 3L

S.No TOPICS ACTIVITY/HOMEWORK

1 అచ్చులు అ నుండి అః వరకు గల అక్షరములను వరుస క్రమములో వ్రాయండి . పఠనము చేయండి.

2 హల్లులు (క నుండి జ) నీతి కథలను వినండి .

3 హల్లులు (చ నుండి ఞ) చందమామ పుస్తకములో చిత్రముల ద్వారా కథలను తెలుసుకోవటానికి ప్రయత్నము చేయండి.

4 హల్లులు (ట నుండి ణ) పంచతంత్ర కథలను చూడండి

5 హల్లులు (త నుండి న) అ నుండి న వరకు వరుస క్రమంలో వ్రాయండి.

6 హల్లులు (ప నుండి వ) వార్తాపత్రిక నందు అక్షరములను గుర్తించండి.

7 హల్లులు (శ నుండి ఐ) వర్ణమాల చార్టును తయారుచేయండి . వర్ణమాల పఠనము చేయండి .

-XX-